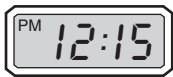


Choose the best answer.

1. The clock below shows the time Helena arrived at her music lesson. What time did she arrive? (12-2)



- A** 5:30
B 4:56
C 4:31
D 4:29
2. What is one way to write the time shown on the clock? (12-1)



- A** Quarter to 12
B Quarter past 12
C 15 past 1
D Quarter to 2

3. Mrs. Washington got to work at 7:55 A.M. She was in the car for 15 minutes, ate breakfast in 30 minutes, and took 50 minutes to get ready, after she got up. What time did Mrs. Washington get up? (12-5)

- A** 7:10 A.M.
B 6:30 A.M.
C 6:20 A.M.
D 6:15 A.M.

4. Cindy practices on her violin 2 hours a week. Which amount of time is less than 2 hours? (12-3)

- A** 70 minutes
B 120 minutes
C 140 minutes
D 180 minutes

5. Scott was in a school play. The play started at 6:45 P.M. and ended at 7:40 P.M. How long did the play last? (12-4)

- A** 35 minutes
B 45 minutes
C 55 minutes
D 65 minutes

6. Which of the following is a time that Diego would be eating breakfast? (12-1)


- A 3:15 A.M.
- B 8:15 P.M.
- C 7:45 A.M.
- D 12:30 A.M.

7. It was 9:00 A.M. Elliot had been at the train station for 35 minutes. When did he arrive at the station? (12-4)

- A 8:15 A.M.
- B 8:25 A.M.
- C 9:25 A.M.
- D 9:35 A.M.

8. There are 60 seconds in 1 minute. How many seconds are in 1 quarter hour? Explain your answer. (12-3)

9. Abdul arrived home from the library at the time shown on the clock.



What time did he arrive home? (12-2)

10. Suki left her house at 8:30 to go to the bus stop. Which is another way to write 8:30? (12-1)

11. Ella got home at 4:45 P.M. After school ended, she had ridden the bus for 15 minutes, had basketball practice for 55 minutes, and studied in the library for 25 minutes. What time did school end? (12-5)


12. The birthday party started at 11:30 A.M. and ended at 1:45 P.M. How long did the party last? (12-4)

13. How many minutes are in 3 hours? (12-3)

14. The 4:00 P.M. temperature was 46°F. This was 12° warmer than the temperature at noon. The noon temperature was 7° warmer than the 8:00 A.M. temperature. What was the 8:00 A.M. temperature in °F? (12-5)

15. Ingrid was playing in a soccer game. The game started at 5:10 P.M. and ended at 6:50 P.M. How long did the game last? (12-4)

16. Ben starts soccer practice at the time shown on the clock. What time does soccer practice begin? (12-1)



17. The class ended at 10:15 A.M. It lasted 1 hour 10 minutes. What time did the class start? (12-4)

18. Jessie’s ballet recital begins at 6:30 P.M. It takes her dad 15 minutes to drive her there from their house. Jessie wants to warm-up at the dance hall for 20 minutes before the recital begins. What time do Jessie and her dad need to leave their house so she has enough time to warm-up? (12-5)
